



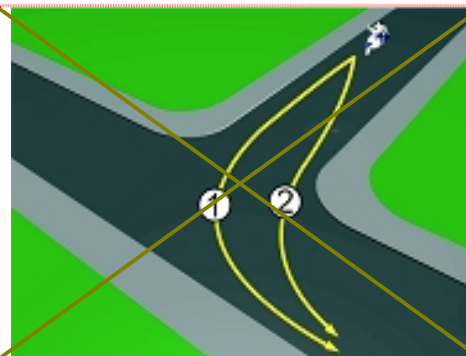
Kojom putanjom voza motocikla mora izvršiti skretanje ulijevo?

1

putanjom broj 2;

2

putanjom broj 1.



Redoslijed prolaska na raskrsnici je:

1

2 – 3 – 1;

2

2 – 1 – 3;

3

1 – 3 – 2.



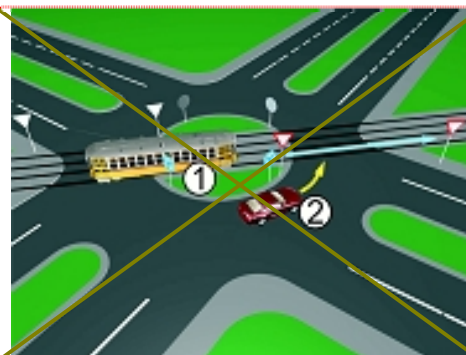
Redoslijed prolaska kroz raskrsnicu je:

1

1 – 2;

2

2 – 1.



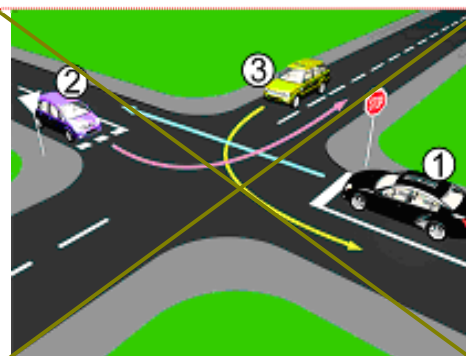
Kako se mora ponašati voza vozila broj 1:

1

propustiti vozilo broj 3, a voziti prije vozila broj 2;

2

propustiti vozilo broj 3, zatim propustiti vozilo broj 2 i zadnji napustiti raskrsnicu.



Redoslijed prolaska kroz raskrsnicu je:

1

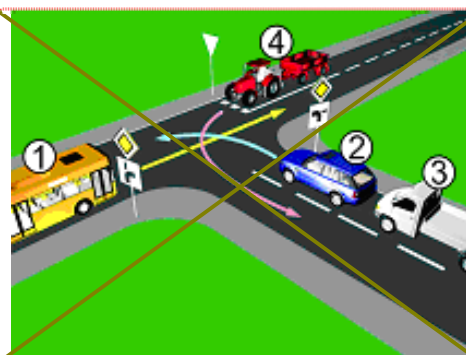
2 – 3 – 4 – 1;

2

2 – 3 – 1 – 4;

3

1 – 2 – 3 – 4.



☐ Kako se mora ponašati vozač vozila broj 1?

- ☐ 1 voziti prije vozila broj 2, a propustiti vozilo broj 3;  
☒ 2 propustiti vozilo broj 2, a voziti prije vozila broj 3.



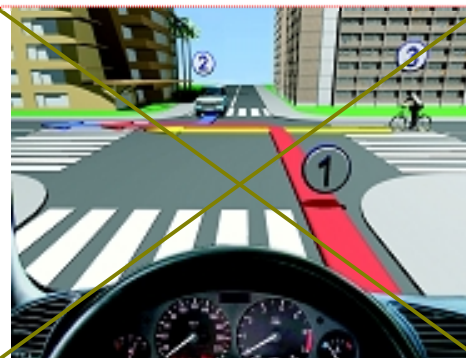
☐ Redoslijed prolaska kroz raskršnicu je:

- ☐ 1 3 – 1 – 2 – 4;  
☐ 2 4 – 2 – 1 – 3;  
☒ 3 3 – 4 – 2 – 1.



☐ Redoslijed prolaska kroz raskršnicu:

- ☒ 1 2 – 3 – 1;  
☐ 2 2 – 1 – 3;  
☐ 3 3 – 1 – 2.



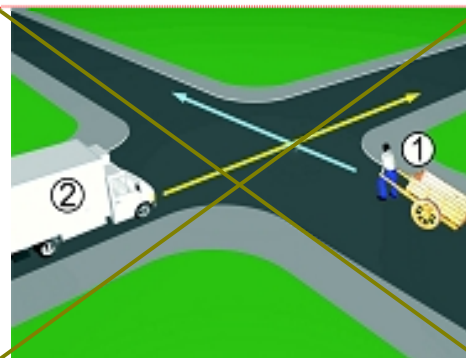
☐ Da li je dozvoljeno vršiti polukružno okretanje?

- ☒ 1 da;  
☐ 2 ne.



☐ Ko mora sačekati u situaciji koja je data na slici?

- ☐ 1 broj 2;  
☒ 2 broj 1.



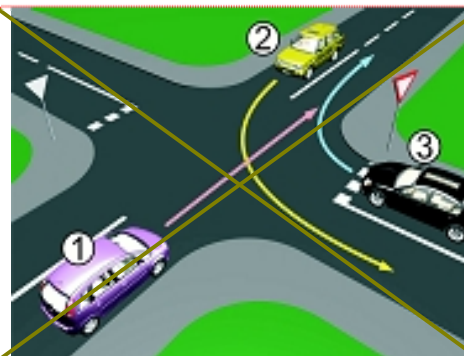
☒ Redoslijed prolaska na raskrsnici je:

- ☒ 5 – 4 – 3 – 2 – 1;  
☐ 1 – 2 – 3 – 4 – 5;  
☐ vozači se dogovore.



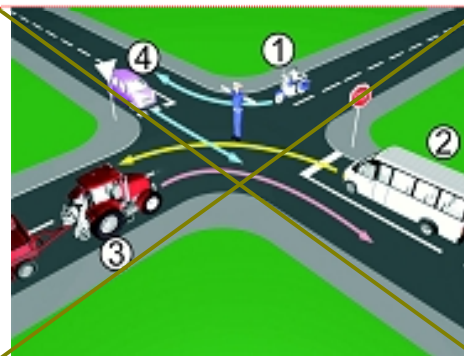
☒ Redoslijed prolaska na raskrsnici je:

- ☐ 2 – 3 – 1;  
☒ 1 – 2 – 3;  
☐ 3 – 1 – 2.



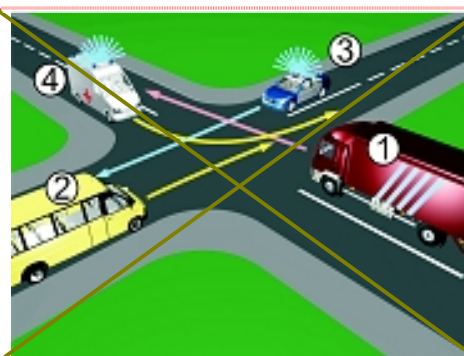
☒ Kojim vozilima je dozvoljen prolaz ?

- ☐ 1 i 3;  
☒ 4 i 2;  
☐ 1 – 2 – 3.



☒ Redoslijed prolaska na raskrsnici je:

- ☒ 4 – 3 – 1 – 2;  
☐ 3 – 4 – 1 – 2;  
☐ 4 – 3 – 2 – 1.



☒ Redoslijed prolaska na raskrsnici je:

- ☐ 1 – 2 – 3;  
☐ 2 – 3 – 1;  
☒ 3 – 1 – 2.

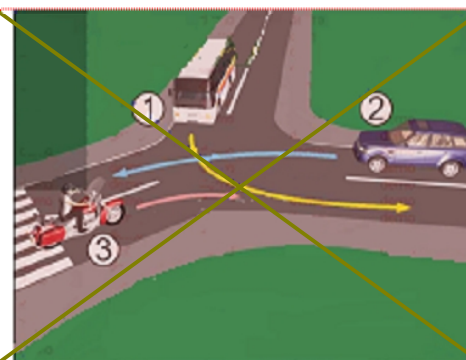


 Redoslijed prolaska na raskrsnici je:

☐ 1    2 – 3 – 1;

☒ 2    3 – 1 – 2;

☐ 3    1 – 3 – 2.

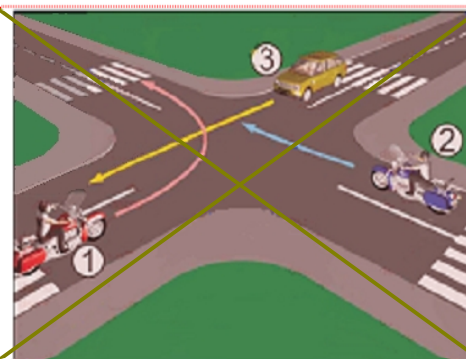


 Redoslijed prolaska na raskrsnici je:

☐ 1    1 – 2 – 3;

☒ 2    3 – 2 – 1;

☐ 3    2 – 1 – 3.

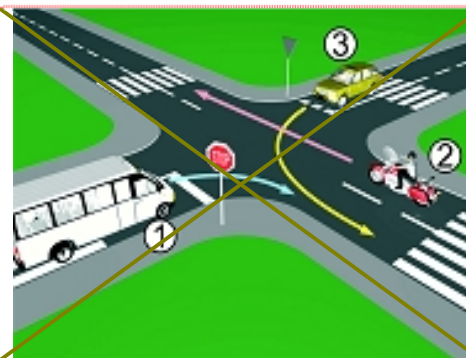


 Redoslijed prolaska na raskrsnici je:

☐ 1    1 – 3 – 2;

☐ 2    2 – 3 – 1;

☒ 3    2 – 1 – 3.



 Redoslijed prolaska na raskrsnici je:

☐ 1    1 – 3 – 2 – 4;

☒ 2    3 – 2 – 1 – 4;

☐ 3    3 – 1 – 2 – 4;

☐ 4    1 – 4 – 2 – 3.



 Kako se mora ponašati voza vozila broj 1?

☐ 1    voziti ispred vozila broj 2;

☒ 2    propustiti vozilo broj 2.



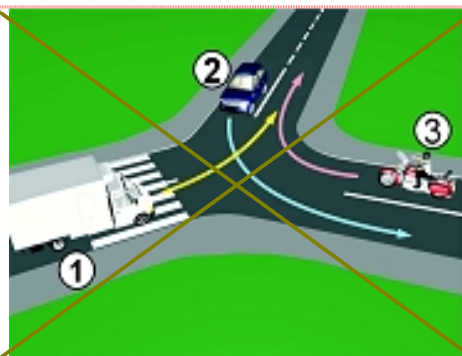


 Redoslijed prolaska na raskrsnici je:

☐ 1    2 – 1 – 3;

☒ 2    3 – 1 – 2;

☐ 3    1 – 2 – 3.



 Redoslijed prolaska na raskrsnici je:

☐ 1    1 – 2 – 3;

☒ 2    1 – 3 – 2;

☐ 3    3 – 1 – 2.

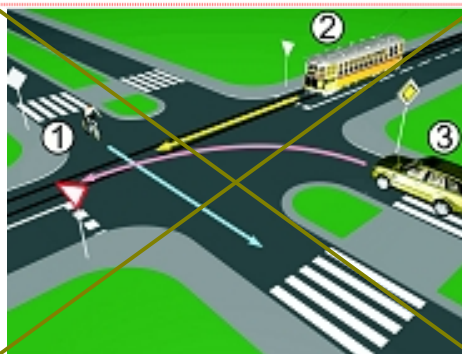


 Redoslijed prolaska na raskrsnici je:

☐ 1    2 – 1 – 3;

☒ 2    1 – 3 – 2;

☐ 3    3 – 2 – 1.

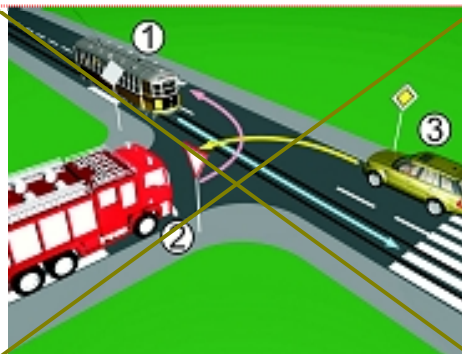


 Redoslijed prolaska na raskrsnici je:

☐ 1    3 – 2 – 1;

☐ 2    1 – 2 – 3;

☒ 3    1 – 3 – 2.

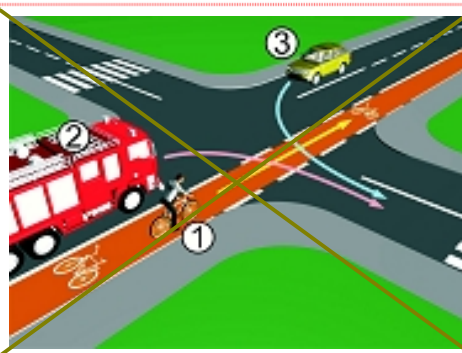


 Redoslijed prolaska na raskrsnici je:

☒ 1    1 – 2 – 3;

☐ 2    2 – 1 – 3;

☐ 3    3 – 1 – 2.

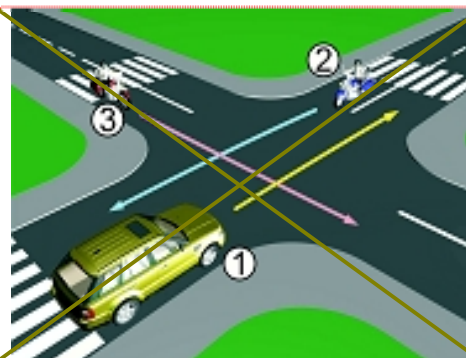


 Redoslijed prolaska na raskrsnici je:

☐ 1    2 – 1 – 3;

☐ 2    3 – 2 – 1;

☒ 3    1 – 3 – 2.



 Redoslijed prolaska na raskrsnici je:

☐ 1    1 – 2 – 3;

☐ 2    2 – 1 – 3;

☒ 3    3 – 1 – 2.

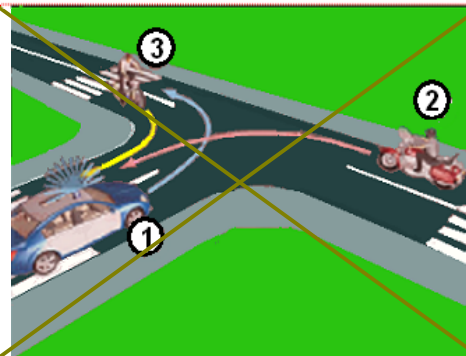


 Redoslijed prolaska na raskrsnici je:

☐ 1    3 – 2 – 1;

☐ 2    2 – 1 – 3;

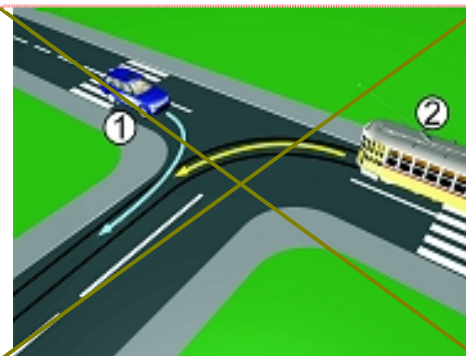
☒ 3    1 – 3 – 2.



 Kako se mora ponašati voza vozila broj 1?

☐ 1    voziti prije vozila broj 2;

☒ 2    propustiti vozilo broj 2.




 Kako se mora ponašati voza vozila broj 1?


☒ 1    propustiti vozilo broj 2;


☐ 2    voziti prije vozila broj 2.

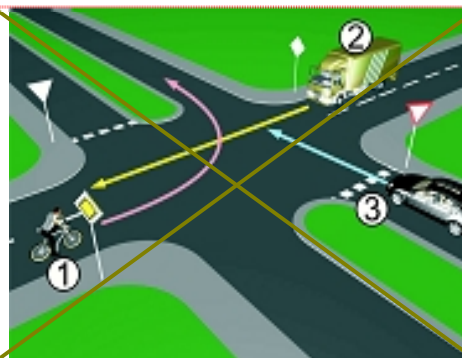


 Redoslijed prolaska na raskrsnici je:


 2 – 1 – 3;


 3 – 1 – 2;


 3 – 2 – 1.

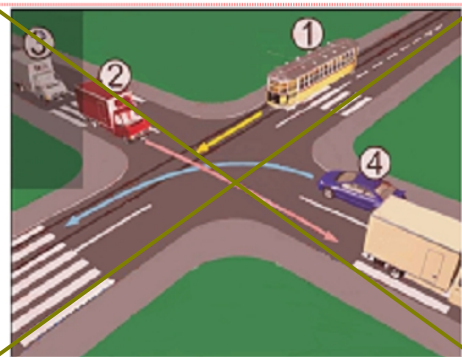


 Redoslijed prolaska na raskrsnici je:


 1 – 2 – 3 – 4;


 4 – 1 – 2 – 3;


 2 – 3 – 4 – 1.



 Redoslijed prolaska na raskrsnici je:


 3 – 1 – 2;


 2 – 1 – 3;


 1 – 2 – 3.

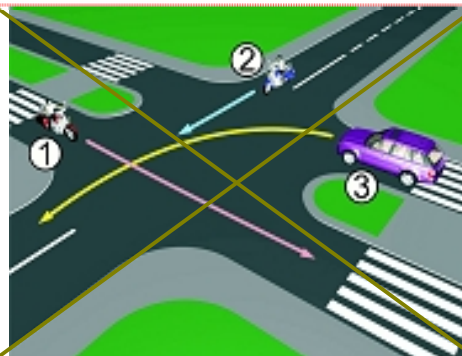


 Redoslijed prolaska na raskrsnici je:


 3 – 2 – 1;


 1 – 2 – 3;


 2 – 1 – 3.

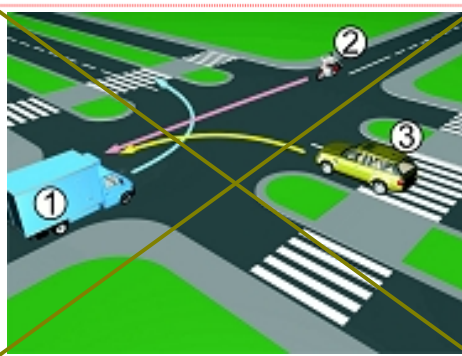


 Redoslijed prolaska na raskrsnici je:

 1 – 3 – 2;


 2 – 3 – 1;


 3 – 2 – 1.






 Redoslijed prolaska na raskrsnici je:


 2 – 3 – 1;


 3 – 2 – 1;


 3 – 1 – 2.



 Redoslijed prolaska na raskrsnici je:


 3 – 2 – 1;


 1 – 2 – 3;


 2 – 1 – 3.

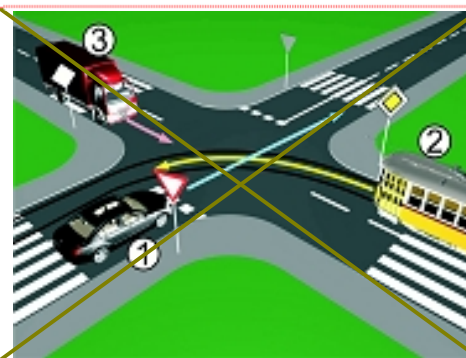


 Redoslijed prolaska na raskrsnici je:


 3 – 2 – 1;


 2 – 3 – 1;


 1 – 2 – 3.



 Redoslijed prolaska na raskrsnici je:


 2 – 3 – 1;


 1 – 3 – 2;


 1 – 2 – 3.

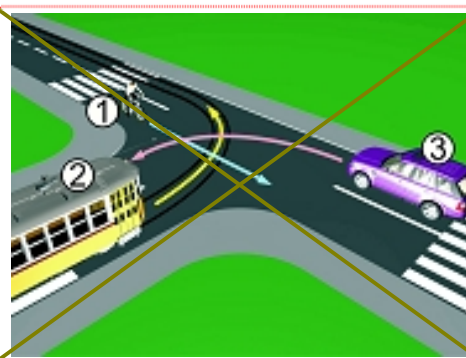


 Redoslijed prolaska na raskrsnici je:

 3 – 2 – 1;


 2 – 1 – 3;


 1 – 2 – 3.




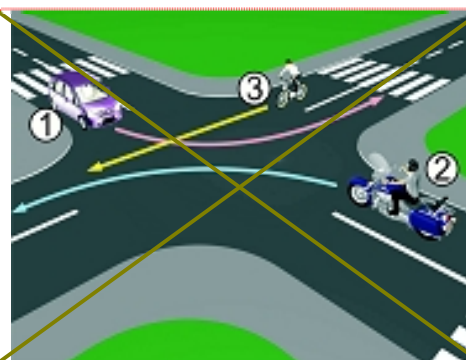


 Redoslijed prolaska na raskrsnici je:


 2 – 3 – 1;


 1 – 3 – 2;


 2 – 1 – 3.

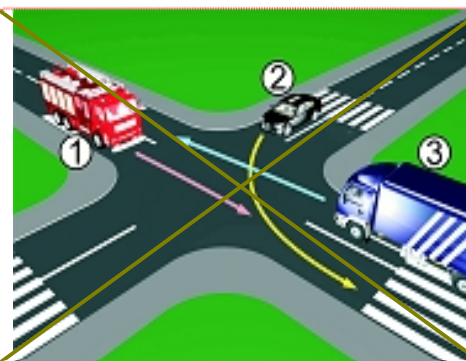


 Redoslijed prolaska na raskrsnici je:


 3 – 2 – 1;


 3 – 1 – 2;


 1 – 2 – 3.

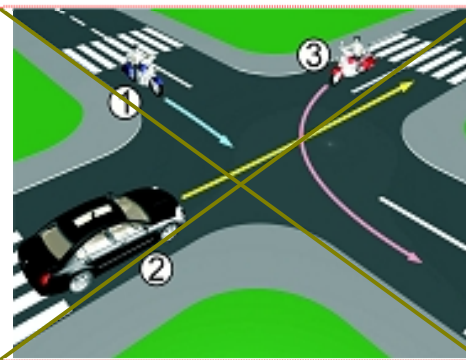


 Redoslijed prolaska na raskrsnici je:


 1 – 2 – 3;


 3 – 1 – 2;


 2 – 1 – 3.



 Redoslijed prolaska na raskrsnici je:


 3 – 2 – 1;


 2 – 1 – 3;


 1 – 2 – 3.

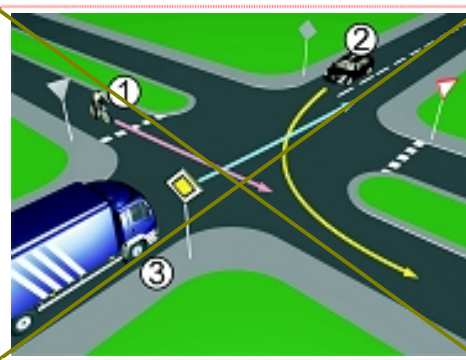


 Redoslijed prolaska na raskrsnici je:


 3 – 2 – 1;


 2 – 1 – 3;


 1 – 3 – 2.



 Redoslijed prolaska na raskrsnici je:


 3 – 1 – 2;


 2 – 1 – 3;


 1 – 3 – 2.

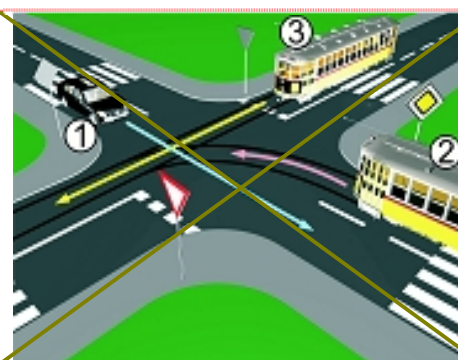


 Redoslijed prolaska na raskrsnici je:


 2 – 1 – 3;


 3 – 2 – 1;


 1 – 3 – 2.



 Redoslijed prolaska na raskrsnici je:


 1 – 2 – 3;


 2 – 3 – 1;


 3 – 2 – 1.



 Redoslijed prolaska na raskrsnici je:


 2 – 1 – 3 – 4;


 1 – 2 – 3 – 4;


 1 – 2 – 4 – 3.



 Redoslijed prolaska na raskrsnici je:


 1 – 3 – 2;


 3 – 2 – 1;


 2 – 3 – 1.

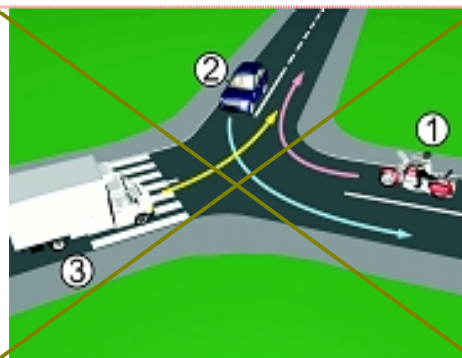


 Redoslijed prolaska na raskrsnici je:


 2 – 3 – 1;


 1 – 2 – 3;


 1 – 3 – 2.



 Redoslijed prolaska na raskrsnici je:


 2 – 3 – 1;

 2 – 1 – 3;

 3 – 1 – 2.

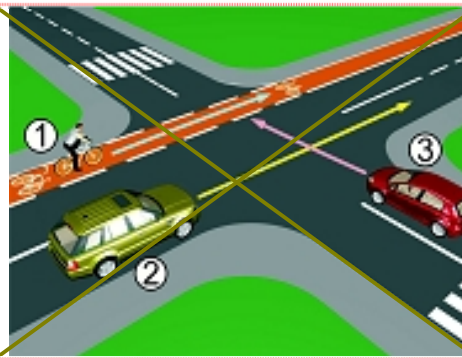


 Redoslijed prolaska na raskrsnici je:


 1 – 3 – 2;


 3 pa 2 i 1 istovremeno;


 2 i 1 istovremeno pa 3.

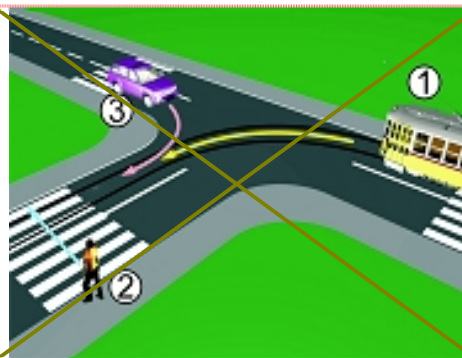


 Redoslijed prolaska na raskrsnici je:


 2 – 1 – 3;


 1 – 3 – 2;


 3 – 1 – 2.

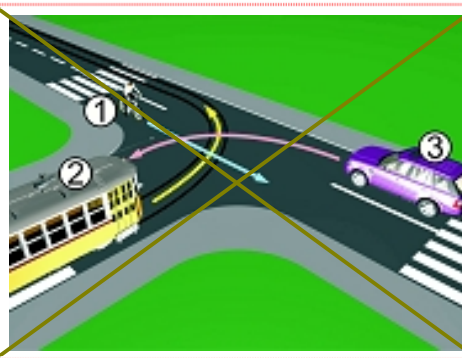


 Redoslijed prolaska na raskrsnici je:

 3 – 2 – 1;

 1 – 3 – 2;

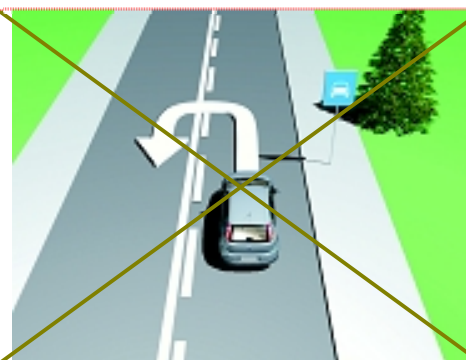
 2 – 1 – 3.



☐ Da li je dozvoljeno vršiti polukružno okretanje ako je situacija kao na slici?

☐ 1 da;

☒ 2 ne.

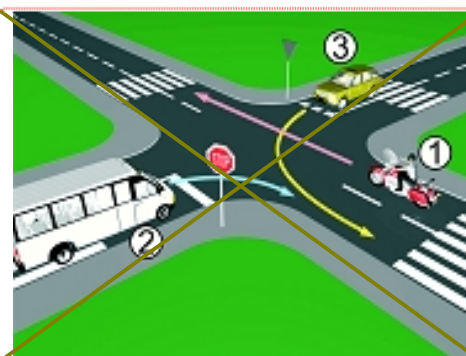


☐ Redoslijed prolaska na raskrsnici je:

☐ 1 1 – 3 – 2;

☒ 2 1 – 2 – 3;

☐ 3 3 – 1 – 2.

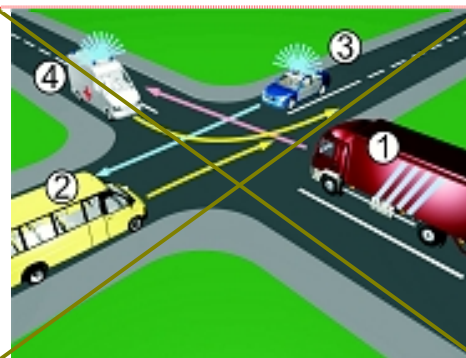


☐ Redoslijed prolaska na raskrsnici je:

☐ 1 3 – 4 – 1 – 2;

☒ 2 4 – 3 – 1 – 2;

☐ 3 1 – 2 – 3 – 4.

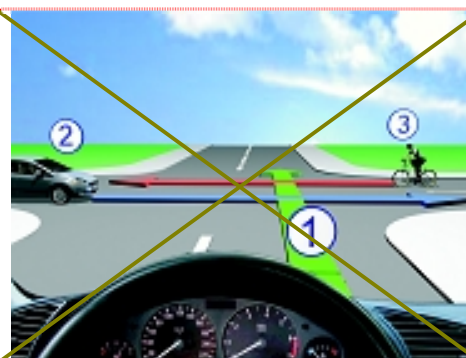


☐ Redoslijed prolaska na raskrsnici je:

☐ 1 1 – 3 – 2;

☒ 2 3 – 1 – 2;

☐ 3 2 – 3 – 1.



☐ Redoslijed prolaska na raskrsnici je:

☐ 1 4 – 1 – 2 – 3;

☒ 2 2 – 3 – 4 – 1;

☐ 3 2 – 3 – 1 – 4.





☐ Redoslijed prolaska na raskrsnici je:

☐ 3 – 2 – 1;

☒ 3 – 1 – 2;

☐ 2 – 3 – 1.



☐ Redoslijed prolaska na raskrsnici je:

☐ 3 – 2 – 1;

☐ 3 – 1 – 2;

☒ 2 – 1 – 3;

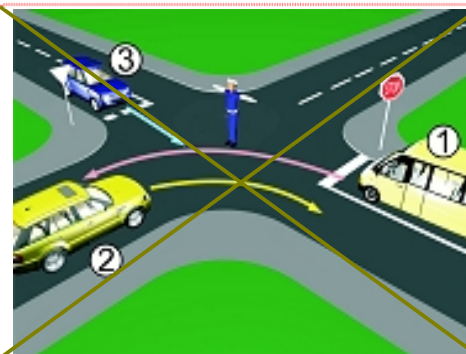


☐ Koje vozilo mora sa ekati u situaciji kao na slici?

☐ vozilo broj 1;

☒ vozilo broj 2;

☐ vozilo broj 3.



☐ Koja vozila moraju sa ekati u situaciji kao na slici?

☐ vozila broj 2 i broj 4;

☒ vozila broj 1 i broj 3.

